

SET [C]

Question Paper
Booklet Sl.No.

MET/PAM-CAT-2012

Roll No.

--	--	--	--	--

Question Paper Booklet - I
Paper I, II & III

Time allowed : 150 Minutes [09.30 a.m. To 12.00 Noon]

Maximum Marks: 150
Total No. of Pages : 32

(Common for MBA and MCA Candidates)

Paper	Title of Paper	Page No.	No. of Questions	Question No.	Marks
I	Mental and Numerical Ability	3 - 13	50	1 to 50	50
II	General Knowledge	14 - 20	50	51 to 100	50
III	General English	21 - 28	50	101 to 150	50

Space for Rough Work Page No. : 29 to 32

Instructions:

Candidates are advised to read the following instructions very carefully.

Non-compliance of any of these may result in cancellation of the answer sheet.

1. THE MEDIUM OF EXAMINATION IS ENGLISH ONLY.
2. **Don't open the Booklet seal before time. Before attempting the papers, the candidates should make sure that no page or question is missing from the question paper. In case there is any discrepancy, it should be immediately reported to the invigilator incharge for obtaining a complete question paper.**
3. Candidates should occupy only the allocated seat at the venue of the allotted centre as per seating plan.
4. No candidate will be admitted to the examination centre after 15 minutes of the commencement of Examination.
5. No candidate shall be allowed to leave the examination hall before the examination is over.
6. **Use only Black Ball pen for answering objective (multiple choice) questions on OMR sheet.**
7. For rough work, only the sheets marked "Rough Work" at the end of the question paper be used.
8. (a) Any candidate who creates disturbance of any kind during examination or otherwise misbehaves in or around the examination hall or refuses to obey the Superintendent/ Invigilator incharge or changes his / her seat, will be expelled from the examination.
(b) Any candidate having in his / her possession or accessible to him/her any paper/book/ notes / mobile phones/ electronics devices which may possibly be of any assistance to him / her or is found giving or receiving assistance, or copying from any other paper/ book / note or allowing any other candidate to copy from his / her OMR answer sheet or is found writing on any other paper / questions set in the question paper during examination or using or attempting to use any other unfair means will be expelled from the examination.

The decision of the Centre Superintendent / Observer to expel a candidate from the examination centre under the above mentioned instructions shall be final.

"EXPULSION" WOULD MEAN CANCELLATION OF CANDIDATURE

9. No identification mark, other than where asked for, on the OMR sheet, is permitted. If done so, the OMR sheet is liable to be treated as cancelled. The decision of the Chief-Coordinator MET/PAM-CAT-2012 in this regard shall be final.
10. If at any stage OMR sheet of a candidate shows or it is otherwise established that he / she has received or attempted to receive help from any source in any manner or has given help or attempted to give help to other candidate in any manner, the relevant OMR sheet and his / her candidature for MET/PAM-CAT-2012 will be cancelled. The decision of the Chief Coordinator, MET/PAM-CAT-2012 in this regard shall be final.

Carrying of Mobile Phone, Blue tooth, other electronic devices, etc. or any other objectionable item in Examination Centre is not permitted.

11. For answering questions, candidates are advised to follow instructions strictly given in the question paper and on the OMR sheet.
12. **There will be no negative marking.**
13. The student must return the question booklet and answersheet (OMR sheet) to the invigilator before leaving the examination centre. However, student must collect carbon/duplicate copy of attempted OMR from Invigilator before leaving the examination hall.

Note : If any candidate does not return his / her answer sheet (OMR sheet) and question booklet, his / her candidature for the admission to MBA/MCA will be cancelled.

EVALUATION OF OMR SHEET

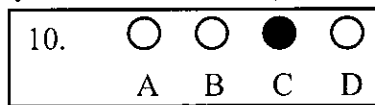
The OMR answer sheets will be evaluated with scanner and computer software.

Don't rub, erase, cut, fold or overwrite on the OMR sheets.

Cutting or overwriting in any box provided for answering question will be deemed to be an incorrect answer.

INSTRUCTIONS FOR FILLING THE OMR (ANSWER SHEET)

- a. USE ONLY DARK BLACK BALL PEN for writing and marking the ovals.
- b. To answer questions, dark only one oval (○ ○ ○ ○) with black ink, which you consider correct, corresponding to a specific question.
- c. Mark your answer in the appropriate oval against the number corresponding to the question you are answering. e.g. correct way to mark answer 10 (C) is:



- d. The following way of marking should be avoided.

○ ○ <input checked="" type="radio"/> ○	○ ○ ⊗ ○	○ ● ● ○	○ ○ ○ ○	○ ○ ○ ●
--	---------	---------	---------	---------
- e. If you darken more than one ovals, your answer will be treated as wrong.
- f. Do not put any stray mark anywhere on the OMR (answer sheet) other than marking in the chosen response.
- g. Do not fold, mutilate, tear or wrinkle the answer sheet.
- h. **Don't use backside of OMR sheet for rough work.**
- i. Since the sheet will be processed by a machine, write and mark the ovals in the appropriate space only.
- j. For rough work, use rough pages of your Question Paper Booklet only.

Signature of the Candidate: **Signature of the Invigilator:**

Paper - I - Mental And Numerical Ability
(Common for MBA and MCA Candidates)

C

Total No. of Questions : 150

Total Marks : 150

Read the following passage and examine each inference given in questions 1 - 5

Ministry of Environment and Forests (MoEF) has granted environmental clearance to the Karkatla open-cast mining expansion project of the Central Coal Fields Ltd. in Bihar that envisages exploitation of non-coking coal reserves. The present production level of 0.8 million tonnes is proposed to be expanded to 1.5 million tonnes per annum at an estimated cost of 67.82 crores under the project. The total land area requirement for the proposed mining activities is about 651 hectares which includes about one-sixth of it as forest land.

1. *Inference:* The expansion project would require about 100 hectares of forest land
(A) Definitely true
(B) Probably true
(C) Can not infer from the data provided
(D) Definitely false

2. *Inference:* Karkatla open cast mine is the only non-coking coal source in the country
(A) Definitely true
(B) Probably true
(C) Can not infer from the data provided
(D) Definitely false

3. *Inference:* There is no demand for non-coking coal
(A) Definitely true
(B) Probably true
(C) Can not infer from the data provided
(D) Definitely false

4. *Inference:* The production cost of coal from Karkatla mine will be about Rs. 450/tonnes/year
(A) Definitely true
(B) Probably true
(C) Can not infer from the data provided
(D) Definitely false

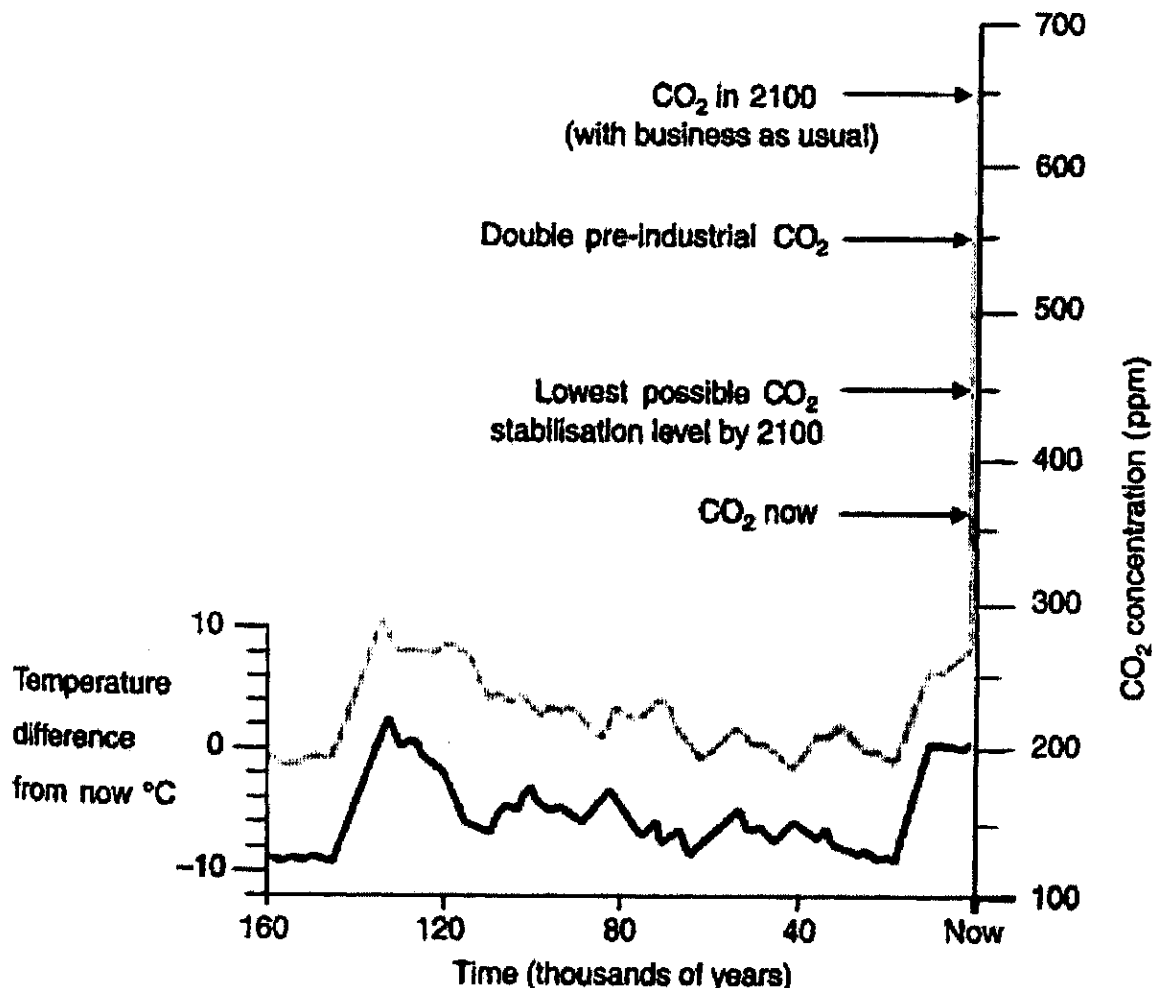
5. *Inference:* Environmental concern gets less priority over the need for coal
(A) Definitely true
(B) Probably true
(C) Can not infer from the data provided
(D) Definitely false

Paper - I - Mental And Numerical Ability
(Common for MBA and MCA Candidates)

C

6. $\frac{(0.6)^0 - (0.1)^{-1}}{\left(\frac{3}{2^3}\right)^{-1} \left(\frac{3}{2}\right)^3 - \left(\frac{1}{3}\right)^{-1}}$ is equal to
- (A) -0.5 (B) -1.5
(C) 0.667 (D) 1.5
7. If x and y are integers such that $x^3 = y^2$, then which of the following can not be the value of y ?
- (A) -1 (B) 1
(C) 8 (D) 16
8. If $-7 \leq x \leq 7$ and $0 \leq y \leq 12$, then what is the greatest possible value of $y - x$?
- (A) 19 (B) 17
(C) 7 (D) 5
9. One day at Modern school, $(1/12)^{\text{th}}$ of the enrolled students were absent, and $(1/5)^{\text{th}}$ of those present went on a trip. If the number of students staying in school that day was 704, then how many students are enrolled at the school?
- (A) 840 (B) 960
(C) 1080 (D) 1600
10. If it is June now, what month will it be 400 months from now?
- (A) June (B) October
(C) January (D) December

Study the following graph related to Carbon dioxide (CO₂) build up and atmospheric temperature increase and answer questions 11 – 15



11. What is the current level of CO₂ concentration in the atmosphere?
- (A) 220 ppm
 - (B) 360 ppm
 - (C) 650 ppm
 - (D) 450 ppm

Paper - I - Mental And Numerical Ability
(Common for MBA and MCA Candidates)

C

12. What was the difference in temperature from now and 100 thousand years before?
- (A) -2°C
 - (B) -4°C
 - (C) -8°C
 - (D) $+3^{\circ}\text{C}$
13. What was the pre-industrial era CO_2 level?
- (A) 220 ppm
 - (B) 360 ppm
 - (C) 650 ppm
 - (D) 450 ppm
14. What percentage increase in CO_2 is expected in 2100, if the current rate of emission is unabated?
- (A) 100%
 - (B) 50%
 - (C) 85%
 - (D) 45%
15. Even with the CO_2 emission reduction in position and achieving lowest possible stabilisation of CO_2 concentration by 2100, the atmospheric temperature is expected to rise by 6°C by the year 2100. What is the approximate temperature rise in $^{\circ}\text{C}$ per unit increase in CO_2 concentration
- (A) 0.03
 - (B) 0.04
 - (C) 0.05
 - (D) 0.06

Paper - I - Mental And Numerical Ability
(Common for MBA and MCA Candidates)

C

16. The letters L, M, N, O, P, Q, R, S and T in their order are denoted by integers from 16 to 24 but not in that order. 4 is assigned to P. The difference between P and T is 5. The difference between N and T is 3. What integer is assigned to N?
- (A) 8 (B) 7
(C) 6 (D) 5
17. If EXAMINATION is given a code 125, what code number can be given to HARDWORK?
- (A) 250 (B) 521
(C) 86 (D) 98
18. If 123 stands for 987, then 234 stands for
- (A) 876 (B) 789
(C) 357 (D) 878
19. Choose the odd one
- (A) YOU (B) JET
(C) FED (D) DOG
20. Find the term which does not fit into the series given below:
G4T, J10R, M20P, P43N
- (A) G4T (B) J10R
(C) M20P (D) P43N
21. If the peon is called clerk, clerk is called cashier, cashier is called manager, manager is called customer, who will disburse the cash?
- (A) Cashier (B) Clerk
(C) Peon (D) Manager
22. In an examination, 34% of the candidates fail in Mathematics and 42% fail in English. If 20% fail in Mathematics and English, the percentage of students passing in both subjects is
- (A) 44 (B) 43
(C) 80 (D) 68

Paper - I - Mental And Numerical Ability
(Common for MBA and MCA Candidates)

C

23. Ram gets 10% more than Lakshman. Then Lakshman gets
- (A) 10% more than Ram
(B) 10% less than Ram
(C) $9\frac{1}{11}$ % more than Ram
(D) None of the above
24. The population of a small town is increased by 7.5% per annum for two years. If the present population is 73,960 then two years before, the population was
- (A) 60,000 (B) 64,000
(C) 68,000 (D) 70,000
25. The difference between simple and compound interest on a certain sum for 3 years at 10% per annum is Rs 63.86. The sum is
- (A) 2,006 (B) 2,060
(C) 2,080 (D) 2,600
26. 16 men and 24 women can do a piece of work in 20 days. The number of days needed to complete the work, if 20 men and 30 women are employed is
- (A) 6 (B) 7
(C) 8 (D) 9
27. The speed of a boat in still water is 10 km/hour. If the boat takes same time to travel 26 km downstream and 14 km upstream, what is the speed of stream?
- (A) 4 km/hour (B) 3 km/hour
(C) 8 km/hour (D) 12 km/hour
28. The sum of two numbers is 100 and their difference is 50. Then the ratio of the two numbers is
- (A) 2 : 1 (B) 3 : 1
(C) 1 : 4 (D) 1 : 5

29. The cost price of 6 oranges equals selling price of 5 oranges. The profit or loss percentage in the transaction is
- (A) 10% (B) 20%
(C) 15% (D) 25%
30. $3^{12} \times (2^x)^{12} = 6^{12}$, then x is equal to
- (A) -6 (B) $\sqrt{6}$
(C) 6 (D) 12
31. Find the missing number shown as ? in the series given below
0, 6, 24, 60, 120, ?, 336
- (A) 240 (B) 156
(C) 180 (D) 210
32. The factors of $\left(x^2 + \frac{1}{x^2} - 3\right)$ are
- (A) $\left(x + \frac{1}{x} - 1\right)\left(x - \frac{1}{x} - 1\right)$ (B) $\left(x - \frac{1}{x} - 1\right)\left(x + \frac{1}{x} + 1\right)$
(C) $\left(x + \frac{1}{x} - 1\right)\left(x - \frac{1}{x} + 1\right)$ (D) $\left(x - \frac{1}{x} + 1\right)\left(x - \frac{1}{x} - 1\right)$
33. If A is 25 kilometers east of B, which is 12 km south of C, which is 9 km west of D, how far is it in kilometers from A to D.
- (A) 20 (B) $5\sqrt{34}$
(C) $5\sqrt{41}$ (D) $10\sqrt{13}$

**Paper - I - Mental And Numerical Ability
(Common for MBA and MCA Candidates)**

C

Continue the series in question numbers 39 and 40:

39. DCFE, HGJI, LKNM ,
- | | |
|----------|----------|
| (A) OPRQ | (B) QPOR |
| (C) PORQ | (D) RQOP |
40. 138, 161, 185, 210,
- | | |
|---------|---------|
| (A) 240 | (B) 252 |
| (C) 248 | (D) 236 |

The office staff of the TCS Company presently consists of three bookkeepers (A, B and C) and five secretaries (D, E, F, G and H). Management is planning to open a new office in another city using three secretaries and two bookkeepers of the present staff. To do so they plan to separate certain individuals who do not function well together. The following guidelines were established to set up the new office.

- (i) Bookkeepers A and C are constantly finding fault with one another and should not be sent as a team to the new office.
- (ii) C and E function well alone but not as a team. They should be separated.
- (iii) D and G have not been on speaking terms for many months. They should not go together.
- (iv) Since D and F have been competing for promotion, they should not be a team.

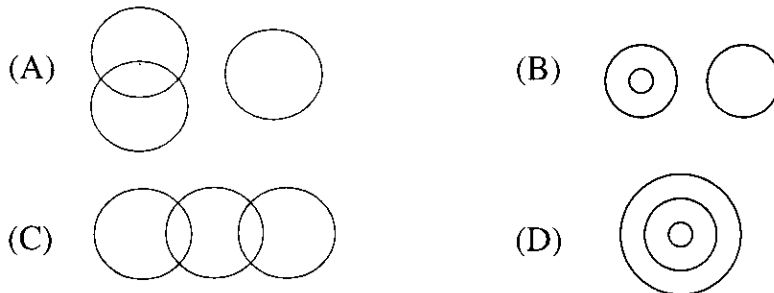
Choose the correct options in the question numbers 41 to 43 based upon the information given above

41. If A is to be moved as one of the bookkeepers , which of the following CANNOT be a possible working unit ?
- | | |
|-----------|-----------|
| (A) ABDEH | (B) ABDGH |
| (C) ABEGH | (D) ABFGH |
42. If C and F are moved to the new office , how many combinations are possible?
- | | |
|-------|-------|
| (A) 1 | (B) 2 |
| (C) 3 | (D) 4 |

Paper - I - Mental And Numerical Ability
(Common for MBA and MCA Candidates)

C

43. If C is sent to the new office, which member of the staff CANNOT go with C?
(A) B (B) D
(C) F (D) G
44. The missing letter of the alphabets shown as? in the alphabet series given below
A L W B M X C N Y D O ? is,
(A) Z (B) K
(C) E (D) Y
45. Which one of the following four logical diagrams represents correctly relationship between musician, instrumentalist, violinists?



In each of the questions from 46 - 50, there are two statements (A) and (B) followed by some conclusions numbered I, II, III (Although the statements are at variance from commonly known facts, you have to assume them true). Read the conclusions and decide which of the conclusions logically follows from the given statements.

46. *Statements:* All aeroplanes are trains. Some trains are trucks
Conclusions: I. Some aeroplanes are trucks
II. Some trucks are aeroplanes
III. Some trucks are trains
IV. Some trains are aeroplanes
(A) Only I and II follow
(B) Only II and III follow
(C) Only III and IV follow
(D) None follows

Paper - I - Mental And Numerical Ability
(Common for MBA and MCA Candidates)

C

47. *Statements:* All shares are debentures. No debenture is equity
Conclusions: I. No equity is a share
II. Some debentures are shares
III. No share is equity
(A) Only I follows
(B) Only II follows
(C) Only III follows
(D) All follow
48. *Statements:* Some tables are TVs. Some TVs are radios.
Conclusions: I. Some tables are radios
II. Some radios are tables
III. All radios are TVs
IV. All TVs are tables
(A) Only I and III follow
(B) Only II and IV follow
(C) None follows
(D) All follow
49. *Statements:* Some taxis have horns. Some taxis have lights
Conclusions: I. Every taxi has either horn or light
II. Some taxis have neither light nor horn
III. Some taxis have horns as well as lights
IV. No taxi has horn as well as light
(A) Only I and II follow
(B) Only II and III follow
(C) Only II and IV follow
(D) Either III or IV follows
50. *Statements:* No box is toy. All toys are blocks
Conclusions: I. Some blocks are toys
II. Some blocks are boxes
III. No block is box
(A) Only I follows
(B) Only either II or III follows
(C) Only either II or III follows and I follow
(D) None follows

Paper - II - General Knowledge
(Common for MBA and MCA Candidates)

C

57. Milk is pasteurized for
- (A) Enhancing taste and flavour
 - (B) Detect adulteration
 - (C) Destroying micro organisms
 - (D) Increasing its fat content
58. To which of the following dynasties did Razia Sultan belong?
- (A) Slave
 - (B) Khilji
 - (C) Tughlaq
 - (D) Lodhi
59. Which among the following amendments is otherwise called the “Mini Constitution”
- (A) 86th Amendment
 - (B) 24th Amendment
 - (C) 1st Amendment
 - (D) 42nd Amendment
60. “Dudhwa National Park” is in
- (A) Madhya Pradesh
 - (B) Rajasthan
 - (C) Gujarat
 - (D) Uttar Pradesh
61. The President of India can make laws during recess of Parliament through
- (A) Statutes
 - (B) Ordinances
 - (C) Bills
 - (D) Notifications

Paper - II - General Knowledge
(Common for MBA and MCA Candidates)

C

62. Who is the Director of World Trade Organization?
(A) Kofi Annan (B) Pascal Lamy
(C) Jose Gragiano da Silva (D) Margret Chan
63. Where is the HQrs of International Monetary Fund?
(A) New York (B) Paris
(C) London (D) Washington D.C.
64. In which of the undergiven countries war with the LTTE was fought and won?
(A) Bangladesh (B) Maldives
(C) Sri Lanka (D) Afghanistan
65. Border between Afghanistan and Pakistan is known as -
(A) Red Cliffe Line (B) McMohan Line
(C) Durand Line (D) Nehru-Noon Line
66. In which of the undergiven states Gir National Park for Asiatic Lions is located?
(A) Gujarat (B) Madhya Pradesh
(C) Uttar Pradesh (D) Assam
67. The people of Kerala speak
(A) Tamil (B) Malayalam
(C) Kannada (D) Telugu
68. Which country is known as playground of Europe
(A) Italy (B) France
(C) Poland (D) Switzerland
69. Which Indian Cricketer was given the title "TIGER"
(A) Sunil Gavaskar (B) Kapil Dev
(C) Mansur Ali Khan Pataudi (D) Bishen Singh Bedi

Paper - II - General Knowledge
(Common for MBA and MCA Candidates)

C

70. Which country's Parliament consists of House of Lords and House of Commons?
(A) U.K. (B) U.S.A.
(C) Russia (D) U.A.E.
71. 'Hallmark' is the certification maintained for standardization for?
(A) Silver (B) Jewellery
(C) Dairy Products (D) Building material
72. Which one of the undergiven animals is the National Aquatic Animal?
(A) Seal (B) Whale
(C) Rohu (D) Dolphin
73. What is the currency of Bangladesh?
(A) Bangladesh Rupee (B) Taka
(C) Ngultrum (D) Dinar
74. R.K. Medhekar is the Director General of which of the undergiven security forces?
(A) C.R.P.F (B) B.S.F.
(C) N.S.G. (D) C.I.S.F.
75. Which of the undergiven Asian countries is the member of G-8?
(A) Japan (B) China
(C) India (D) Singapore
76. Name the capital of Lakshadweep and Minicoy?
(A) Port Blair (B) Cochin
(C) Silvasa (D) Kavarati
77. VAT Stands for
(A) Value Addition Tax (B) Value Added Tax
(C) Value Added Taxation (D) Valued Added Tax
78. BPO stands for
(A) Business Promotion Office (B) Beat Policing Organization
(C) Business Process Outsourcing (D) Business Promotion Outsourcing

Paper - II - General Knowledge
(Common for MBA and MCA Candidates)

C

79. LOC stands for
(A) Line of Control (B) Line Out of Control
(C) Line of Change (D) Line Out of Challenge
80. The first hour of every sitting of the Parliament is known as:
(A) Debate Hour (B) Discussion Hour
(C) Zero Hour (D) Question Hour
81. The opening match of IPL 2012 between Chennai Super Kings and Mumbai Indians was played at?
(A) Chennai (B) Mumbai
(C) Delhi (D) Kanpur
82. North Zone Cultural Centre is located in which one of the undergiven places?
(A) Srinagar (B) Shimla
(C) Patiala (D) Chandigarh
83. Nobel Prize for Economics (2011) was given to which of the undergiven personalities?
(A) Thomas Sargent and Christopher Jims
(B) Thomas Transtomer
(C) Julion Barnes
(D) Daniel Schechtman
84. Which of the undergiven personalities was given Mahatma Gandhi Peace Award (2009) in 2011?
(A) Mrs. Angela Markels (B) Aung San Suu Kyi
(C) Nelson Mandela (D) Mrs. Sheikh Hasina Wajed
85. Who is the author of the book entitled "Rediscovery of India"?
(A) Wajahat Habibullah (B) T.N. Srinivasan
(C) Meera Kumar (D) Meghnad Desai
86. The 17th SAARC Summit in 2011 was held in which of the undergiven countries?
(A) Maldives (B) Sri Lanka
(C) Bhutan (D) Bangladesh

Paper - II - General Knowledge
(Common for MBA and MCA Candidates)

C

87. In recent Punjab Assembly Elections, who among the following was defeated?
(A) Manpreet Badal (B) Captain Amrinder Singh
(C) Sukhbir Badal (D) Rajinder Kaur Bhattal
88. In which of the following states Assembly Elections were not held recently?
(A) Uttar Pradesh (B) Punjab
(C) Nagaland (D) Manipur
89. Who was elected as Chief Minister in Uttarakhand after recent assembly elections?
(A) B.C. Khandurii (B) Harish Rawat
(C) Vijay Bahuguna (D) Ramesh Pokhriyal
90. In computer terminology, which of the following is a volatile storage device?
(A) CD (B) Hard Disk
(C) ROM (D) RAM
91. Which key should be pressed to start a new paragraph in MS-Word?
(A) Down cursor key (B) Enter Key
(C) Shift + Enter (D) Control + Enter
92. Dr. Jai Rup Singh is the Vice-Chancellor of which of the undergiven Universities of Punjab?
(A) Agriculture University (Ludhiana)
(B) Guru Nanak Dev University (Amritsar)
(C) Central University (Bhatinda)
(D) Punjab University (Chandigarh)
93. What for Nannhi Chhanv scheme in Punjab initiated by Mrs. Harsimrat Kaur Badal (MP)?
(A) To check corruption
(B) To provide Right to Service
(C) To create Reserve forest
(D) To protect girl child & save environment

Paper - II - General Knowledge
(Common for MBA and MCA Candidates)

C

94. Who is the Speaker of XIV Punjab Vidhan Sabha?
(A) Charanjit Singh Atwal (B) Dinesh Singh Babbu
(C) Sunil Jakhad (D) Mohammed Sadique
95. Hansi-Butana Canal dispute is between which two states?
(A) Punjab-Himachal Pradesh
(B) Punjab-Haryana
(C) Punjab-Rajasthan
(D) Punjab-Uttarakhand
96. Recent uprising in the Arab countries were first started from which of the undergiven countries?
(A) Tunisia (B) Egypt
(C) Yemen (D) Syria
97. "Operation Green Hunt" has been taken up by the CRPF against which of the undergiven militant outfits?
(A) Nagas (B) ULFA
(C) Naxalities (D) HUJI
98. From which country India is purchasing its Medium Multirole Combat Aircraft : "Raffale"?
(A) USA (B) EU
(C) France (D) Russia
99. Fukushima Incident in Japan was taken place due to which of the undergiven reasons?
(A) Sabotage (B) Tsunami
(C) Flood (D) Cyclone
100. Which country out of the given list has constructed nuclear power plant in India at Kudankulam?
(A) Russia (B) France
(C) USA (D) Britain

DIRECTIONS (Questions 101 - 105)

Choose the correct or more suitable form of the verb to fill in the blanks from the options provided.

- 101.** I will phone when he _____ back.
- (A) comes
(B) come
(C) will come
(D) would come
- 102.** When I get home, my dog _____ at the gate waiting for me.
- (A) sits
(B) sitting
(C) sat
(D) will be sitting
- 103.** The earth _____ round the Sun.
- (A) moves
(B) move
(C) moving
(D) moved
- 104.** It started to rain while we _____ tennis.
- (A) are playing
(B) were playing
(C) had played
(D) play
- 105.** I _____ a new car last week.
- (A) buy
(B) bought
(C) have bought
(D) had bought

Paper - III - General English
(Common for MBA and MCA Candidates)

C

DIRECTIONS (Questions 106 - 110)

Select from the answer choices given under each keyword an appropriate word which is most nearly the same in meaning.

106. MERE

- | | |
|------------|----------------|
| (A) Humble | (B) Incomplete |
| (C) Only | (D) Inferior |

107. UNEQUIVOCAL

- | | |
|------------------|------------------|
| (A) Fearless | (B) Unmistakable |
| (C) Incomparable | (D) Variable |

108. ENCROACH

- | | |
|---------------|----------------|
| (A) To infest | (B) Spread out |
| (C) Weaken | (D) Trespass |

109. RAMIFICATION

- | | |
|-------------------|-----------------|
| (A) Problem | (B) Combination |
| (C) Reinforcement | (D) Consequence |

110. BENCHMARK

- | | |
|----------------|---------------------|
| (A) Exhibition | (B) Reference Point |
| (C) Label | (D) Repute |

Directions (Questions 111 - 115): Identify the one-word substitute for the given expression :

111. A post without remuneration.

- | | |
|---------------|-----------------|
| (A) voluntary | (B) sinecure |
| (C) honorary | (D) involuntary |

Paper - III - General English
(Common for MBA and MCA Candidates)

C

112. A disease which spreads by contact.
(A) contiguous (B) contagious
(C) infectious (D) contractual
113. One who has mania for stealing things.
(A) nymphomaniac (B) theftomaniac
(C) Stealomaniac (D) kleptomaniac
114. A group of islands.
(A) strait (B) peninsula
(C) continent (D) archipelago
115. One who gets pleasure from hurting other people.
(A) sadist (B) masochist
(C) quisling (D) nihilist

Directions (Questions 116-120): Identify the word that is *opposite* in meaning to the given word:

116. **MITIGATE**
(A) Alleviate (B) Facilitate
(C) Aggravate (D) Immediate
117. **CONVICT**
(A) Acquit (B) Implicate
(C) Incriminate (D) Arrest
118. **IMPEDE**
(A) Exploit (B) Facilitate
(C) Stop (D) Decrease

Paper - III - General English
(Common for MBA and MCA Candidates)

C

119. SHREWD

- | | |
|---------------|-------------|
| (A) Clever | (B) Foolish |
| (C) Dishonest | (D) Lewd |

120. DISSUADE

- | | |
|--------------|--------------|
| (A) Activate | (B) Evade |
| (C) Assent | (D) Persuade |

DIRECTIONS (Questions 121 - 130)

In the following passage, some blanks have been left, each of which is numbered. The numbers are printed below the passage, and against each, 4 choices are suggested. Read the passage carefully, and fill in the blanks from the alternatives given against each number.

PASSAGE:

Externally, India has become one of the most attractive global business and off shoring destinations with foreign investors 121 invest. Liberal regulatory norms have 122 a lot of excitement and positive sentiment. Further, there has been a conscious effort by the government to 123 conducive environment for foreign investors has also seen a 124 shift. Rather than hoping for short time gains, investors are now looking to 125 long term relationships. In the midst of all this, India's infrastructure has been 126 to keep pace with the rapid speed of development. However, change seems to be around the corner. Connectivity is set to 127 with the expansion of the National Highway Development Plan and the rural road network. Our cities, 128 poor infrastructure and planning, are now looking to find the right balance of new development providing services 129 protecting the environment and 130 innovation.

- | | |
|----------------------------|--------------|
| 121. (A) queuing up | (B) planning |
| (C) keen | (D) coming |

- | | |
|------------------------|--------------|
| 122. (A) gained | (B) created |
| (C) set up | (D) attached |

- | | |
|------------------------|---------------|
| 123. (A) create | (B) have |
| (C) politicize | (D) construct |

Paper - III - General English
(Common for MBA and MCA Candidates)

C

124. (A) weird (B) rapid
(C) minor (D) paradigm
125. (A) protect (B) nurture
(C) live up to (D) make
126. (A) struggling (B) multiplying
(C) going (D) growing
127. (A) explode (B) raise
(C) expand (D) ablaze
128. (A) languished by (B) disqualified by
(C) poorer by (D) crippled with
129. (A) but (B) while
(C) and (D) yet
130. (A) promoting (B) protecting
(C) creating (D) having

DIRECTIONS (Questions 131 - 135)

In each of the following idioms, choose the best meaning from the four choices.

131. "Getting along in years" means
- (A) getting old (B) getting tired
(C) becoming successful (D) taking a long time

**Paper - III - General English
(Common for MBA and MCA Candidates)**

C

132. "To beat around the bush" means
- (A) to not know (B) to avoid question
(C) to go on a hike (D) to search in the bush
133. "To put the cart before the horse" means
- (A) to plan ahead
(B) that you can not do something
(C) to do things in the wrong order
(D) to give food to the horse
134. If it is "just what the doctor ordered" it is
- (A) still a dream (B) what you need
(C) totally wrong (D) medicine
135. "Once in a blue moon" means
- (A) often (B) sometimes
(C) never (D) rarely

DIRECTIONS (Questions 136 - 140)

The following sentences have been divided into 4 parts – A, B, C, D. Identify which part in each sentence is grammatically incorrect.

136. (A) He committed suicide (B) twice
(C) before (D) he died

Paper - III - General English
(Common for MBA and MCA Candidates)

C

137. (A) Unless you do not (B) walk fast
(C) you can not reach (D) the station in time
138. (A) I think (B) she sang
(C) very well (D) Isn't it?
139. (A) With the rise in prices (B) it has become
(C) difficult to make (D) my both ends meet
140. (A) Some men are born great (B) some achieve greatness
(C) and some had greatness (D) thrust on them

Directions (Questions 141-145): Identify the word that is spelt correctly.

141.
(A) Receive (B) Recieve
(C) Riceive (D) Recive
142.
(A) Psycology (B) Psychology
(C) Cycology (D) Psychlogy
143.
(A) Concience (B) Consiense
(C) Conscience (D) Conciense
144.
(A) Comitee (B) Commitee
(C) Commite (D) Committee
145.
(A) Adress (B) Address
(C) Addriss (D) Address

Paper - III - General English
(Common for MBA and MCA Candidates)

C

Directions (Questions 146-150): Complete the sentence with a suitable preposition/article.

146. He studies ——— university.

- | | |
|-----------|-------------|
| (A) in a | (B) in an |
| (C) at an | (D) with an |

147. He was accused — theft.

- | | |
|----------|--------|
| (A) with | (B) of |
| (C) from | (D) by |

148. She is ——— tallest girl in the class.

- | | |
|---------|---------|
| (A) a | (B) an |
| (C) the | (D) one |

149. What is the time ——— your watch?

- | | |
|--------|----------|
| (A) in | (B) on |
| (C) by | (D) with |

150. He congratulated me ——— my success.

- | | |
|----------|---------|
| (A) on | (B) for |
| (C) with | (D) in |



Space For Rough Work

C

Space For Rough Work

C

Space For Rough Work

C

Space For Rough Work

C