

IIT-JEE 2012

PAPER - 1

PART - II : CHEMISTRY

SECTION - I : Single Correct Answer Type

This section contains 10 multiple choice questions, Each question has four choices, (A), (B), (C) and (D) out of which ONLY ONE is correct.

21. Which ordering of compounds is according to the decreasing order of the oxidation state of nitrogen?
 (A) HNO_3 , NO , NH_4Cl , N_2 (B) HNO_3 , NO , N_2 , NH_4Cl
 (C) HNO_3 , NH_4Cl , NO , N_2 (D) NO , HNO_3 , NH_4Cl , N_2

Ans. (B)

Sol. $\text{HNO}_3 = +5$

$\text{NO} = +2$

$\text{NH}_4\text{Cl} = -3$

$\text{N}_2 = 0$

So correct order will be HNO_3 , NO , N_2 , NH_4Cl .

22. The kinetic energy of an electron in the second Bohr orbit of a hydrogen atom is [a_0 is Bohr radius] :

(A) $\frac{h^2}{4\pi^2 m a_0^2}$

(B) $\frac{h^2}{16\pi^2 m a_0^2}$

(C) $\frac{h^2}{32\pi^2 m a_0^2}$

(D) $\frac{h^2}{64\pi^2 m a_0^2}$

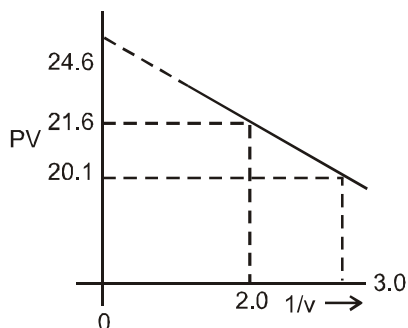
Ans. (C)

Sol. $mv(4a_0) = \frac{h}{\pi}$

$$\text{so, } v = \frac{h}{4m\pi a_0}$$

$$\text{so } \text{KE} = \frac{1}{2} mv^2 = \frac{1}{2} m \cdot \frac{h^2}{16m^2\pi^2 a_0^2} = \frac{h^2}{32m\pi^2 a_0^2}$$

Sol.



$$\left(P + \frac{a}{V^2}\right) (V) = RT$$

$$PV + a/V = RT$$

$$PV = RT - a/v$$

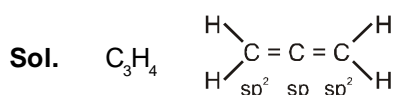
$$y = RT - a(x)$$

$$\text{So slope} = a = \frac{21.6 - 20.1}{3 - 2} = \frac{1.5}{1} = 1.5$$

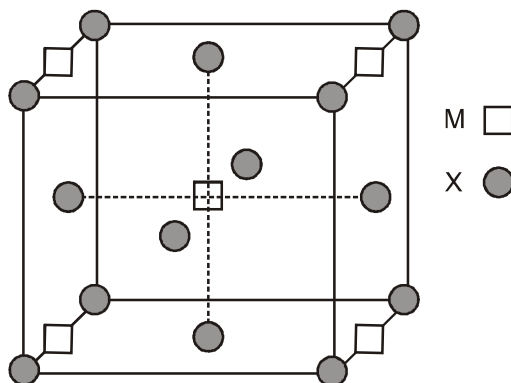
25. In allene (C_3H_4), the type(s) of hybridisation of the carbon atoms is (are) :

- (A) sp and sp^3 (B) sp and sp^2 (C) only sp^3 (D) sp^2 and sp^3

Ans. (B)



26. A compound $M_p X_q$ has cubic close packing (ccp) arrangement of X. Its unit cell structure is shown below. The empirical formula of the compound is



- (A) MX (B) MX_2 (C) M_2X (D) M_5X_{14}

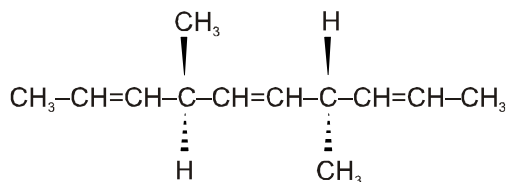
Ans. (B)

Sol. No. of M atoms = $\frac{1}{4} \times 4 + 1 = 1 + 1 = 2$

$$\text{No. of X atoms} = \frac{1}{2} \times 6 + \frac{1}{8} \times 8 = 3 + 1 = 4$$

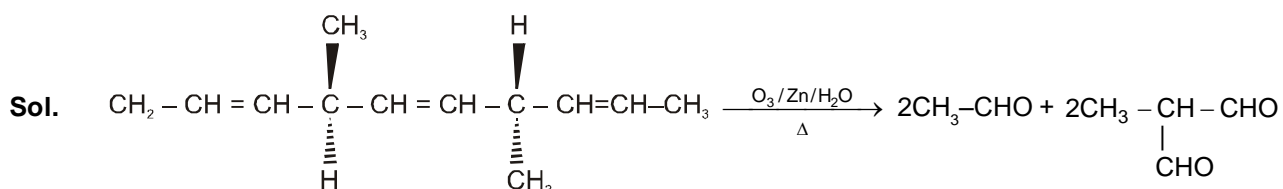
$$\text{so formula} = M_2X_4 = MX_2$$

27. The number of optically active products obtained from the **complete** ozonolysis of the given compound is:



- (A) 0 (B) 1 (C) 2 (D) 4

Ans. (A)



All optically inactive products

28. As per IUPAC nomenclature, the name of the complex $[\text{Co}(\text{H}_2\text{O})_4(\text{NH}_3)_2]\text{Cl}_3$ is :

- (A) Tetraaquadiaminocobalt (III) chloride (B) Tetraaquadiamminocobalt (III) chloride
(C) Diaminetetraaquacoblat (III) chloride (D) Diamminetetraaquacobalt (III) chloride

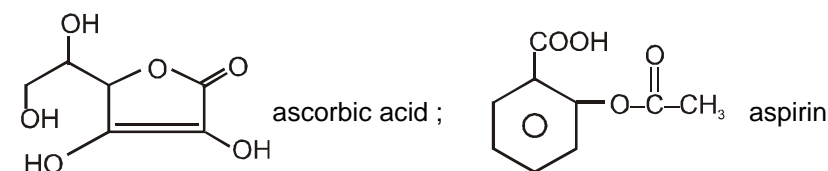
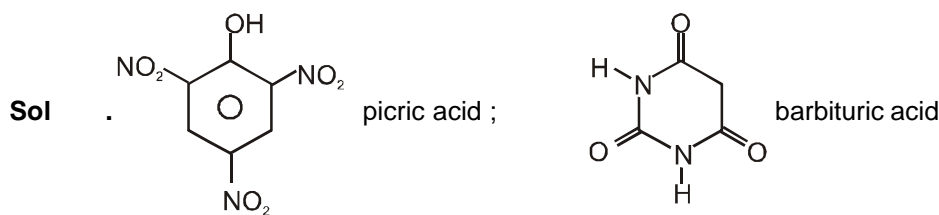
Ans. (D)

Sol. $[\text{Co}(\text{H}_2\text{O})_4(\text{NH}_3)_2]\text{Cl}_3$
= Diamminetetraaquacobalt (III) chloride.

29. The carboxyl functional group ($-\text{COOH}$) is present in

- (A) picric acid (B) barbituric acid
(C) ascorbic acid (D) aspirin

Ans. (D)



30. The colour of light absorbed by an aqueous solution of CuSO_4 is :
 (A) orange-red (B) blue-green
 (C) yellow (D) violet

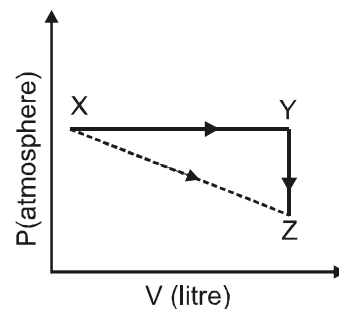
Ans. (A)

Sol. CuSO_4 will be absorbing orange-red colour & hence will be of blue colour.

SECTION – II : Multiple Correct Answer(s) Type

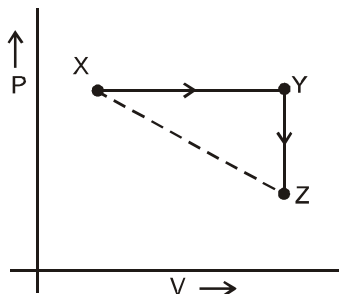
This section contains **5 multiple choice questions**. Each question has four choices (A), (B), (C) and (D) out of which **ONE or MORE** are correct.

31. For an ideal gas, consider only P-V work in going from an initial state X to the final state Z. The final state Z can be reached by either of the two paths shown in the figure. Which of the following choice(s) is (are) correct? [take ΔS as change in entropy and w as work done].



- (A) $\Delta S_{x \rightarrow z} = \Delta S_{x \rightarrow y} + \Delta S_{y \rightarrow z}$
 (B) $w_{x \rightarrow z} = w_{x \rightarrow y} + w_{y \rightarrow z}$
 (C) $w_{x \rightarrow z} = w_{x \rightarrow y}$
 (D) $\Delta S_{x \rightarrow y \rightarrow z} = \Delta S_{x \rightarrow y}$

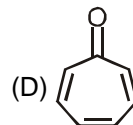
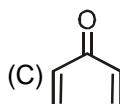
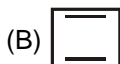
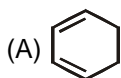
Ans. (AC)



Sol.

- (A) $\Delta S_{x \rightarrow z} = \Delta S_{x \rightarrow y} + \Delta S_{y \rightarrow z}$ (Correct)
 (B) $w_{x \rightarrow y} = w_{x \rightarrow y} + w_{y \rightarrow z}$ (Incorrect)
 (C) $w_{x \rightarrow y \rightarrow z} = w_{x \rightarrow y}$ (Correct)
 (D) $\Delta S_{x \rightarrow y \rightarrow z} = \Delta S_{x \rightarrow y}$ (Incorrect)

32. Which of the following molecules, in pure form, is (are) **unstable** at room temperature ?



Ans. (B)

Sol. is antiaromatic and unstable

SECTION - III : Integer Answer Type

This section contains 5 questions. The answer to each question is a single-digit integer, ranging from 0 to 9 (both inclusive).

36. An organic compound undergoes first-order decomposition. The time taken for its decomposition to 1/8 and 1/10 of its initial concentration are $t_{1/8}$ and $t_{1/10}$ respectively. What is the value of $\frac{[t_{1/8}]}{[t_{1/10}]} \times 10$? ($\log_{10} 2 = 0.3$)

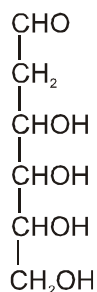
Ans. 9

Sol. $Kt_{1/8} = \ln \left\{ \frac{C_0}{C_0/8} \right\} = \ln 8$

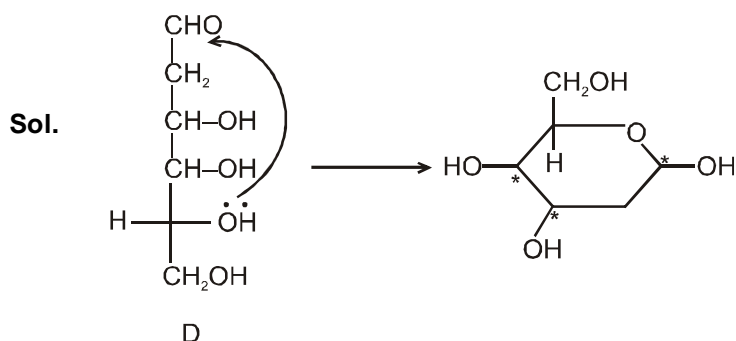
$$Kt_{1/10} = \ln \left\{ \frac{C_0}{C_0/10} \right\} = \ln 10$$

$$\text{then } \frac{t_{1/8}}{t_{1/10}} \times 10 = \frac{\ln 8}{\ln 10} \times 10 = \frac{\log 2}{\log 10} \times 10 = 9$$

37. When the following aldohexose exists in its D-configuration, the total number of stereoisomers in its pyranose form is :

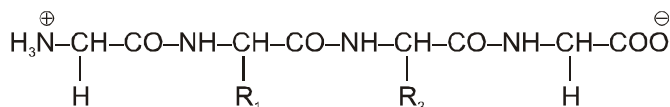


Ans. 8



$$\text{Total stereoisomers} = 2^3 = 8$$

38. The substituents R_1 and R_2 for nine peptides are listed in the table given below. How many of these peptides are positively charged at $\text{pH} = 7.0$?

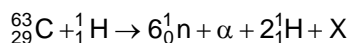


Peptide	R_1	R_2
I	H	H
II	H	CH_3
III	CH_2COOH	H
IV	CH_2CONH_2	$(\text{CH}_2)_4\text{NH}_2$
V	CH_2CONH_2	CH_2CONH_2
VI	$(\text{CH}_2)_4\text{NH}_2$	$(\text{CH}_2)_4\text{NH}_2$
VII	CH_2COOH	CH_2CONH_2
VIII	CH_2OH	$(\text{CH}_2)_4\text{NH}_2$
IX	$(\text{CH}_2)_4\text{NH}_2$	CH_3

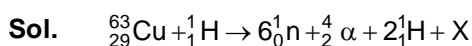
Ans. 4

Sol. For the polypeptide the isoelectric point will be more than 7. That means the given polypeptide is of basic nature so it must contain two or more amino groups. So (iv) , (vi) , (viii) and (ix) are the correct options.

39. The periodic table consists of 18 groups. An isotope of copper, on bombardment with protons, undergoes a nuclear reaction yielding element X as shown below. To which group, element X belongs in the periodic table?



Ans. 8



$$64 = 6 + 4 + 2 + A \quad \Rightarrow \quad A = 52$$

$$29 + 1 = 30 = 0 + 2 + 2 + z \quad \Rightarrow \quad z = 26$$

element X should be iron in group 8.

40. 29.2% (w/w) HCl stock solution has a density of 1.25 g mL^{-1} . The molecular weight of HCl is 36.5 g mol^{-1} . The volume (mL) of stock solution required to prepare a 200 mL solution of 0.4 M HCl is :

Ans. 8

Sol. 29.2% (w/w) HCl has density = 1.25 g/ml

Now, mole of HCl required in 0.4 M HCl

$$= 0.4 \times 0.2 \text{ mole} = 0.08 \text{ mole}$$

if v mol of original HCl solution is taken

then mass of solution = $1.25 v$

$$\text{mass of HCl} = (1.25 v \times 0.292)$$

$$\text{mole of HCl} = \frac{1.25v \times 0.292}{36.5} = 0.08$$

$$\text{so, } v = \frac{36.5 \times 0.08}{0.29 \times 1.25} \text{ mol} = 8 \text{ mL}$$